





11

Choose the Best Measure

Here's How

<p>This is 1 cup.</p> 	<p>This is 1 pint.</p> 
<p>This is 1 quart.</p> 	<p>This is 1 gallon.</p> 

Try These

Which measurement makes sense? Ring the best measure.

1.



10 c 10 pt 10 qt

2.



1 c 1 qt 1 gal

3.



1 c 1 qt 1 gal

4.



20 c 20 qt 20 gal



Which measurement makes sense? Ring the best measure.

Think about the real size of the objects in the pictures.

▶ 1.



1 c 1 pt 1 qt

2.



2 pt 2 qt 2 gal

3.



50 c 50 pt 50 gal

4.



1 c 1 qt 1 gal

5.



1 c 1 pt 1 qt

6.



1 pt 1 qt 1 gal

Think about the number of cups in a pint and the number of pints in a quart.

▶ 7. Mr. Curry put 15 ? of gas in his car.
pints quarts gallons

8. How many cups are in a quart? _____