

Lines of Symmetry

Here's How

Look at the line.
Think about folding this shape on the line.
Would both sides match? If they match,
then the line is a **line of symmetry**.



Yes, the sides match.
This is a line of
symmetry.



No, the sides do
not match.
This is not a line
of symmetry

Try These

If you folded the shape, would both sides
match? Ring yes or no.

1.



yes no

2.

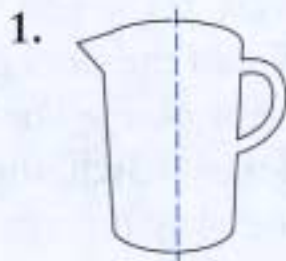


yes no

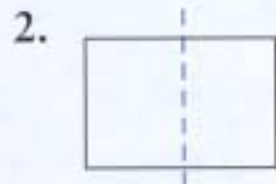
If you folded the shape, would both sides match? Ring yes or no.

TIP

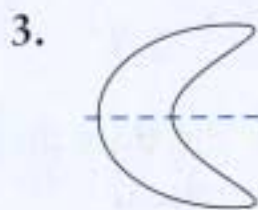
When both sides are the same, a figure is symmetrical.



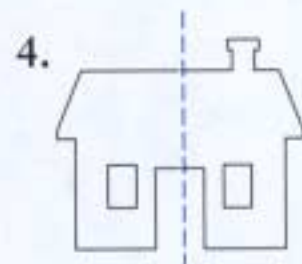
yes no



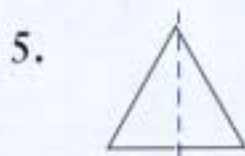
yes no



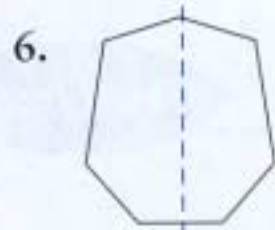
yes no



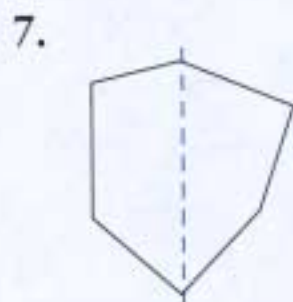
yes no



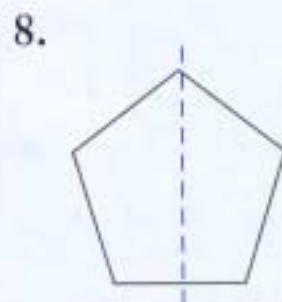
yes no



yes no



yes no



yes no